

Test Booklet Code  
Test Booklet No.  
ENGLISH  
**T1**

**DUGRI**

This Booklet contains 32 pages, including Rough Page.

Do not open this Test Booklet until you are asked to do so.

### Important Instructions:

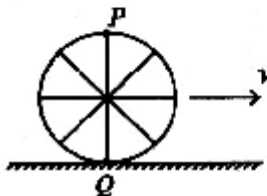
- The Answer Sheet is inside this Test Booklet. When you are directed to open the Test Booklet, take out the Answer Sheet and fill in the particulars on ORIGINAL Copy carefully with blue/black ball point pen only.
- The test is of 3 hours 20 minutes duration and the Test Booklet contains 200 multiple-choice questions (four options with a single correct answer) from Physics, Chemistry and Biology (Botany and Zoology). 50 questions in each subject are divided into two Sections (A and B) as per details given below:
  - Section A shall consist of 35 (Thirty-five) Questions in each subject (Question Nos – 1 to 35, 51 to 85, 101 to 135 and 151 to 185). All questions are compulsory.
  - Section B shall consist of 15 (Fifteen) questions in each subject (Question Nos – 36 to 50, 86 to 100, 136 to 150 and 186 to 200). In Section B, a candidate needs to attempt any 10 (Ten) questions out of 15 (Fifteen) in each subject.

Candidates are advised to read all 15 questions in each subject of Section B before they start attempting the question paper. In the event of a candidate attempting more than ten questions, the first ten questions answered by the candidate shall be evaluated.
- Each question carries 4 marks. For each correct response, the candidate will get 4 marks. For each incorrect response, one mark will be deducted from the total scores. The maximum marks are 720.
- Use Blue/Black Ball Point Pen only for writing particulars on this page/markings responses on Answer Sheet.
- Rough work is to be done in the space provided for this purpose in the Test Booklet only.
- On completion of the test, the candidate must hand over the Answer Sheet (ORIGINAL and OFFICE Copy) to the Invigilator before leaving the Room/Hall. The candidates are allowed to take away this Test Booklet with them.
- The CODE for this Booklet is **T1**. Make sure that the CODE printed on the Original Copy of the Answer Sheet is the same as that on this Test Booklet. In case of discrepancy, the candidate should immediately report the matter to the Invigilator for replacement of both the Test Booklet and the Answer Sheet.
- The candidates should ensure that the Answer Sheet is not folded. Do not make any stray marks on the Answer Sheet. Do not write your Roll No. anywhere else except in the specified space in the Test Booklet/ Answer Sheet.
- Use of white fluid for correction is NOT permissible on the Answer Sheet.
- Each candidate must show on-demand his/her Admit Card to the Invigilator.
- No candidate, without special permission of the centre Superintendent or Invigilator, would leave his/her seat.
- The candidates should not leave the Examination Hall without handing over their Answer Sheet to the Invigilator on duty and sign (with time) the Attendance Sheet twice. Cases, where a candidate has not signed the Attendance Sheet second time, will be deemed not to have handed over the Answer Sheet and dealt with as an Unfair Means case.
- Use of Electronic/Manual Calculator is prohibited.
- The candidates are governed by all Rules and Regulations of the examination with regard to their conduct in the Examination Room/Hall. All cases of unfair means will be dealt with as per the Rules and Regulations of this examination.
- No part of the Test Booklet and Answer Sheet shall be detached under any circumstances.
- The candidates will write the Correct Test Booklet Code as given in the Test Booklet/Answer Sheet in the Attendance Sheet.
- Compensatory time of one hour five minutes will be provided for the examination of three hours and 20 minutes duration, whether such candidate (having a physical limitation to write) uses the facility of Scribe or not.

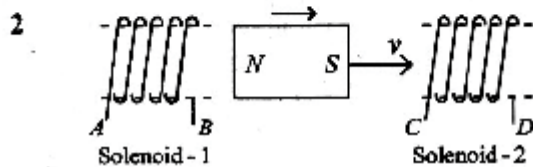


**Physics : Section-A (Q. No. 1 to 35)**

- 1 A wheel of a bullock cart is rolling on a level road as shown in the figure below. If its linear speed is  $v$  in the direction shown, which one of the following options is correct ( $P$  and  $Q$  are any highest and lowest points on the wheel, respectively)?

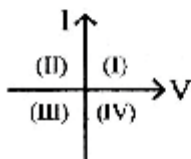


- (1) Both the points  $P$  and  $Q$  move with equal speed.  
 (2) Point  $P$  has zero speed.  
 (3) Point  $P$  moves slower than point  $Q$ .  
 (4) Point  $P$  moves faster than point  $Q$ .



In the above diagram, a strong bar magnet is moving towards solenoid-2 from solenoid-1. The direction of induced current in solenoid-1 and that in solenoid-2, respectively, are through the directions:

- (1)  $AB$  and  $CD$  (2)  $BA$  and  $DC$   
 (3)  $AB$  and  $DC$  (4)  $BA$  and  $CD$
- 3 Consider the following statements A and B and identify the correct answer :

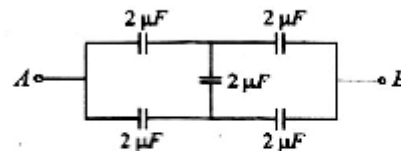


- A. For a solar-cell, the I-V characteristics lies in the IV quadrant of the given graph.  
 B. In a reverse biased  $pn$  junction diode, the current measured in ( $\mu A$ ), is due to majority charge carriers.
- (1) Both A and B are correct.  
 (2) Both A and B are incorrect.  
 (3) A is correct but B is incorrect.  
 (4) A is incorrect but B is correct.

- 4 A wire of length ' $l$ ' and resistance  $100\ \Omega$  is divided into 10 equal parts. The first 5 parts are connected in series while the next 5 parts are connected in parallel. The two combinations are again connected in series. The resistance of this final combination is:

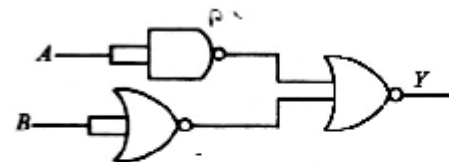
- (1)  $55\ \Omega$  (2)  $60\ \Omega$   
 (3)  $26\ \Omega$  (4)  $52\ \Omega$

- 5 In the following circuit, the equivalent capacitance between terminal  $A$  and terminal  $B$  is :



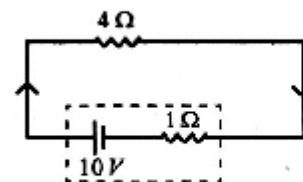
- (1)  $0.5\ \mu F$  (2)  $4\ \mu F$   
 (3)  $2\ \mu F$  (4)  $1\ \mu F$

- 6 The output ( $Y$ ) of the given logic gate is similar to the output of an/a :



- (1) OR gate (2) AND gate  
 (3) NAND gate (4) NOR gate

- 7 The terminal voltage of the battery, whose emf is  $10V$  and internal resistance  $1\ \Omega$ , when connected through an external resistance of  $4\ \Omega$  as shown in the figure is :



- (1)  $8V$  (2)  $10V$   
 (3)  $4V$  (4)  $6V$

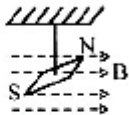


8 The mass of a planet is  $\frac{1}{10}$ th that of the earth and

its diameter is half that of the earth. The acceleration due to gravity on that planet is :

- (1)  $4.9 \text{ m s}^{-2}$  (2)  $3.92 \text{ m s}^{-2}$   
(3)  $19.6 \text{ m s}^{-2}$  (4)  $9.8 \text{ m s}^{-2}$

9 In a uniform magnetic field of  $0.049 \text{ T}$ , a magnetic needle performs 20 complete oscillations in 5 seconds as shown. The moment of inertia of the needle is  $9.8 \times 10^{-6} \text{ kg m}^2$ . If the magnitude of magnetic moment of the needle is  $x \times 10^{-5} \text{ Am}^2$ ; then the value of 'x' is :



- (1)  $50 \pi^2$  (2)  $1280 \pi^2$   
(3)  $5 \pi^2$  (4)  $128 \pi^2$

10 If  $c$  is the velocity of light in free space, the correct statements about photon among the following are :

- A. The energy of a photon is  $E = hv$ .  
B. The velocity of a photon is  $c$ .  
C. The momentum of a photon,  $p = \frac{hv}{c}$ .  
D. In a photon-electron collision, both total energy and total momentum are conserved.  
E. Photon possesses positive charge.

Choose the correct answer from the options given below :

- (1) A, C and D only  
(2) A, B, D and E only  
(3) A and B only  
(4) A, B, C and D only

$$y = \frac{FLm}{\rho \Delta L}$$

11 The maximum elongation of a steel wire of  $l \text{ m}$  length if the elastic limit of steel and its Young's modulus, respectively, are  $8 \times 10^8 \text{ N m}^{-2}$  and  $2 \times 10^{11} \text{ N m}^{-2}$ , is :

- (1) 40 mm (2) 8 mm  
(3) 4 mm (4) 0.4 mm

12 A logic circuit provides the output  $Y$  as per the following truth table :

A	B	Y
0	0	1
0	1	0
1	0	1
1	1	0

The expression for the output  $Y$  is :

- (1)  $B$  (2)  $\bar{B}$   
(3)  $A.B + \bar{A}$  (4)  $A.\bar{B} + \bar{A}$

13 The moment of inertia of a thin rod about an axis passing through its mid point and perpendicular to the rod is  $2400 \text{ g cm}^2$ . The length of the 400 g rod is nearly :

- (1) 20.7 cm (2) 72.0 cm  
(3) 8.5 cm (4) 17.5 cm

14 In a vernier calipers,  $(N + 1)$  divisions of vernier scale coincide with  $N$  divisions of main scale. If 1 MSD represents 0.1 mm, the vernier constant (in cm) is :

- (1)  $100N$  (2)  $10(N + 1)$   
(3)  $\frac{1}{10N}$  (4)  $\frac{1}{100(N + 1)}$

15 Match List I with List II.

**List I**  
(Spectral Lines of Hydrogen for transitions from)

**List II**  
(Wavelengths (nm))

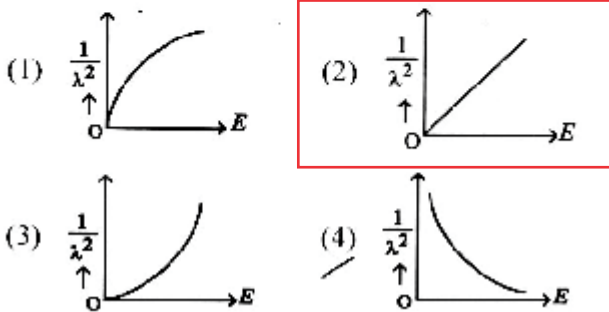
- A.  $n_2 = 3$  to  $n_1 = 2$  I. 410.2  
B.  $n_2 = 4$  to  $n_1 = 2$  II. 434.1  
C.  $n_2 = 5$  to  $n_1 = 2$  III. 656.3  
D.  $n_2 = 6$  to  $n_1 = 2$  IV. 486.1

Choose the correct answer from the options given below :

- (1) A-IV, B-III, C-I, D-II  
(2) A-I, B-II, C-III, D-IV  
(3) A-II, B-I, C-IV, D-III  
(4) A-III, B-IV, C-II, D-I

- 16 If the monochromatic source in Young's double slit experiment is replaced by white light, then
- (1) there will be a central bright white fringe surrounded by a few coloured fringes.
  - (2) all bright fringes will be of equal width.
  - (3) interference pattern will disappear.
  - (4) there will be a central dark fringe surrounded by a few coloured fringes.

- 17 The graph which shows the variation of  $\left(\frac{1}{\lambda^2}\right)$  and its kinetic energy,  $E$  is (where  $\lambda$  is de Broglie wavelength of a free particle):



- 18 Match List-I with List-II.

List-I (Material)	List-II (Susceptibility ( $\chi$ ))
A. Diamagnetic	I. $\chi = 0$
B. Ferromagnetic	II. $0 > \chi \geq -1$
C. Paramagnetic	III. $\chi \gg 1$
D. Non-magnetic	IV. $0 < \chi < \epsilon$ (a small positive number)

Choose the correct answer from the options given below:

- (1) A-III, B-II, C-I, D-IV
- (2) A-IV, B-III, C-II, D-I
- (3) A-II, B-III, C-IV, D-I
- (4) A-II, B-I, C-III, D-IV

- 19 An unpolarised light beam strikes a glass surface at Brewster's angle. Then
- (1) both the reflected and refracted light will be completely polarised.
  - (2) the reflected light will be completely polarised but the refracted light will be partially polarised.
  - (3) the reflected light will be partially polarised.
  - (4) the refracted light will be completely polarised.

- 20 A particle moving with uniform speed in a circular path maintains:

- (1) constant velocity but varying acceleration.
- (2) varying velocity and varying acceleration.
- (3) constant velocity.
- (4) constant acceleration.

- 21 The quantities which have the same dimensions as those of solid angle are:

- (1) strain and arc
- (2) angular speed and stress
- (3) strain and angle
- (4) stress and angle

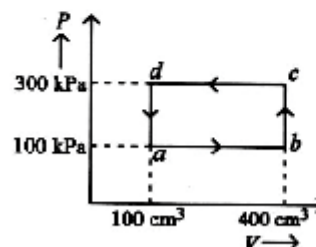
- 22 A bob is whirled in a horizontal plane by means of a string with an initial speed of  $\omega$  rpm. The tension in the string is  $T$ . If speed becomes  $2\omega$  while keeping the same radius, the tension in the string becomes:

- (1)  $\frac{T}{4}$
- (2)  $\sqrt{2}T$
- (3)  $T$
- (4)  $4T$

- 23 If  $x = 5 \sin\left(\pi t + \frac{\pi}{3}\right) m$  represents the motion of a particle executing simple harmonic motion, the amplitude and time period of motion, respectively, are:

- (1) 5 cm, 1 s
- (2) 5 m, 1 s
- (3) 5 cm, 2 s
- (4) 5 m, 2 s

- 24 A thermodynamic system is taken through the cycle  $abcd$ . The work done by the gas along the path  $bc$  is:



- (1)  $-90 J$
- (2)  $-60 J$
- (3) zero
- (4)  $30 J$

25 Given below are two statements :

**Statement I :** Atoms are electrically neutral as they contain equal number of positive and negative charges.

**Statement II :** Atoms of each element are stable and emit their characteristic spectrum.

In the light of the above statements, choose the *most appropriate* answer from the options given below :

- (1) Statement I is correct but Statement II is incorrect.  
 (2) Statement I is incorrect but Statement II is correct.  
 (3) Both Statement I and Statement II are correct.  
 (4) Both Statement I and Statement II are incorrect.

26 In an ideal transformer, the turns ratio is  $\frac{N_p}{N_s} = \frac{1}{2}$ .

The ratio  $V_s : V_p$  is equal to (the symbols carry their usual meaning) :

- (1) 1 : 1                      (2) 1 : 4  
 (3) 1 : 2                      (4) 2 : 1

27 Two bodies A and B of same mass undergo completely inelastic one dimensional collision. The body A moves with velocity  $v_1$  while body B is at rest before collision. The velocity of the system after collision is  $v_2$ . The ratio  $v_1 : v_2$  is :

- (1) 4 : 1                      (2) 1 : 4  
 (3) 1 : 2                      (4) 2 : 1

28  ${}_{82}^{290}\text{X} \xrightarrow{\alpha} \text{Y} \xrightarrow{e^-} \text{Z} \xrightarrow{\beta^-} \text{P} \xrightarrow{e^-} \text{Q}$

In the nuclear emission stated above, the mass number and atomic number of the product Q respectively, are :

- (1) 288, 82                      (2) 286, 81  
 (3) 280, 81                      (4) 286, 80

29 Given below are two statements: one is labelled as **Assertion A** and the other is labelled as **Reason R**.

**Assertion A :** The potential ( $V$ ) at any axial point, at 2 m distance ( $r$ ) from the centre of the dipole of dipole moment vector  $\vec{P}$  of magnitude,  $4 \times 10^{-6} \text{ C m}$ , is  $\pm 9 \times 10^3 \text{ V}$ .

(Take  $\frac{1}{4\pi\epsilon_0} = 9 \times 10^9 \text{ SI units}$ )

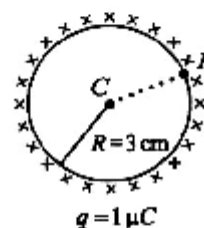
**Reason R :**  $V = \pm \frac{2P}{4\pi\epsilon_0 r^2}$ , where  $r$  is the distance of any axial point, situated at 2 m from the centre of the dipole.

In the light of the above statements, choose the *correct* answer from the options given below:

- (1) A is true but R is false.  
 (2) A is false but R is true.  
 (3) Both A and R are true and R is the correct explanation of A.  
 (4) Both A and R are true and R is NOT the correct explanation of A.

30 A thin spherical shell is charged by some source. The potential difference between the two points C and P (in V) shown in the figure is:

(Take  $\frac{1}{4\pi\epsilon_0} = 9 \times 10^9 \text{ SI units}$ )



- (1)  $0.5 \times 10^5$                       (2) zero  
 (3)  $3 \times 10^5$                       (4)  $1 \times 10^5$

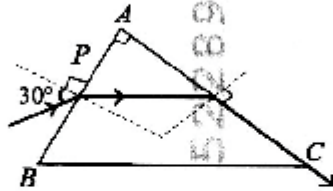
31 A thin flat circular disc of radius 4.5 cm is placed gently over the surface of water. If surface tension of water is  $0.07 \text{ Nm}^{-1}$ , then the excess force required to take it away from the surface is :

- (1) 1.98 mN                      (2) 99 N  
 (3) 19.8 mN                      (4) 198 N



Physics : Section-B (Q. No. 36 to 50)

- 32 A light ray enters through a right angled prism at point  $P$  with the angle of incidence  $30^\circ$  as shown in figure. It travels through the prism parallel to its base  $BC$  and emerges along the face  $AC$ . The refractive index of the prism is:



- (1)  $\frac{\sqrt{3}}{4}$  (2)  $\frac{\sqrt{3}}{2}$   
(3)  $\frac{\sqrt{5}}{4}$  (4)  $\frac{\sqrt{5}}{2}$

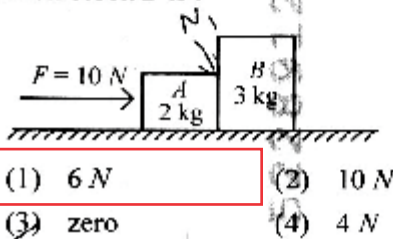
- 33 At any instant of time  $t$ , the displacement of any particle is given by  $2t - 1$  (SI unit) under the influence of force of  $5N$ . The value of instantaneous power is (in SI unit):

- (1) 7 (2) 6  
(3) 10 (4) 5

- 34 A tightly wound 100 turns coil of radius 10 cm carries a current of 7 A. The magnitude of the magnetic field at the centre of the coil is (Take permeability of free space as  $4\pi \times 10^{-7}$  SI units):

- (1) 4.4 mT (2) 44 T  
(3) 44 mT (4) 4.4 T

- 35 A horizontal force  $10 N$  is applied to a block  $A$  as shown in figure. The mass of blocks  $A$  and  $B$  are 2 kg and 3 kg, respectively. The blocks slide over a frictionless surface. The force exerted by block  $A$  on block  $B$  is :



- (1) 6 N (2) 10 N  
(3) zero (4) 4 N

- 36 A small telescope has an objective of focal length 140 cm and an eye piece of focal length 5.0 cm. The magnifying power of telescope for viewing a distant object is:

- (1) 17 (2) 32  
(3) 34 (4) 28

- 37 Two heaters A and B have power rating of 1 kW and 2 kW, respectively. Those two are first connected in series and then in parallel to a fixed power source. The ratio of power outputs for these two cases is:

- (1) 1 : 2 (2) 2 : 3  
(3) 1 : 1 (4) 2 : 9

- 38 If the mass of the bob in a simple pendulum is increased to thrice its original mass and its length is made half its original length, then the new time

period of oscillation is  $\frac{x}{2}$  times its original time period. Then the value of  $x$  is:

- (1)  $2\sqrt{3}$  (2) 4  
(3)  $\sqrt{3}$  (4)  $\sqrt{2}$

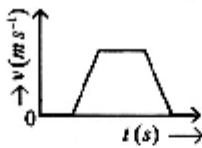
- 39 A parallel plate capacitor is charged by connecting it to a battery through a resistor. If  $I$  is the current in the circuit, then in the gap between the plates :

- (1) displacement current of magnitude equal to  $I$  flows in a direction opposite to that of  $I$ .  
(2) displacement current of magnitude greater than  $I$  flows but can be in any direction.  
(3) there is no current.  
(4) displacement current of magnitude equal to  $I$  flows in the same direction as  $I$ .

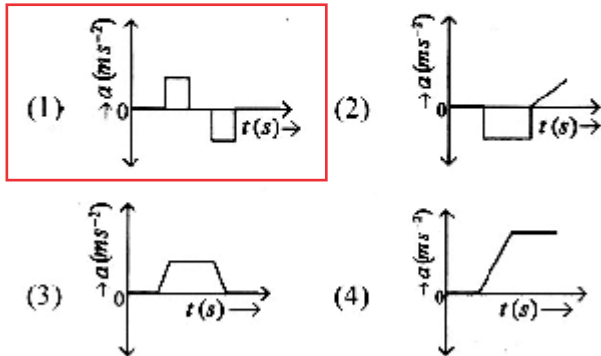
- 40 A metallic bar of Young's modulus,  $0.5 \times 10^{11} N m^{-2}$  and coefficient of linear thermal expansion  $10^{-5} ^\circ C^{-1}$ , length 1 m and area of cross-section  $10^{-3} m^2$  is heated from  $0^\circ C$  to  $100^\circ C$  without expansion or bending. The compressive force developed in it is:

- (1)  $100 \times 10^3 N$  (2)  $2 \times 10^3 N$   
(3)  $5 \times 10^3 N$  (4)  $50 \times 10^3 N$

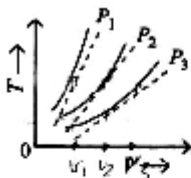
- 41 The velocity ( $v$ ) – time ( $t$ ) plot of the motion of a body is shown below :



The acceleration ( $a$ ) – time ( $t$ ) graph that best suits this motion is :



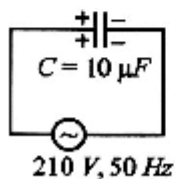
- 42 The following graph represents the T-V curves of an ideal gas (where T is the temperature and V the volume) at three pressures  $P_1$ ,  $P_2$  and  $P_3$  compared with those of Charles's law represented as dotted lines.



Then the correct relation is:

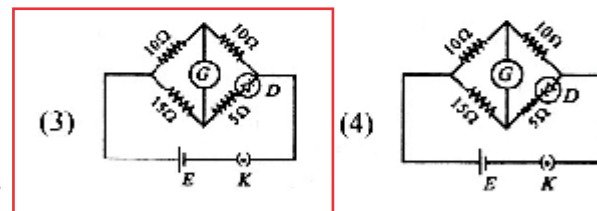
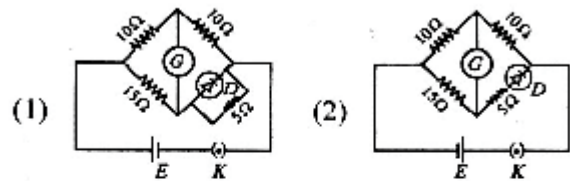
- (1)  $P_2 > P_1 > P_3$  (2)  $P_1 > P_2 > P_3$   
(3)  $P_3 > P_2 > P_1$  (4)  $P_1 > P_3 > P_2$

- 43 A  $10 \mu\text{F}$  capacitor is connected to a  $210 \text{ V}$ ,  $50 \text{ Hz}$  source as shown in figure. The peak current in the circuit is nearly ( $\pi = 3.14$ ):



- (1)  $1.20 \text{ A}$  (2)  $0.35 \text{ A}$   
(3)  $0.58 \text{ A}$  (4)  $0.93 \text{ A}$

- 44 Choose the correct circuit which can achieve the bridge balance.



- 45 The property which is not of an electromagnetic wave travelling in free space is that :

- (1) they travel with a speed equal to  $\frac{1}{\sqrt{\mu_0 \epsilon_0}}$ .

- (2) they originate from charges moving with uniform speed.

- (3) they are transverse in nature.

- (4) the energy density in electric field is equal to energy density in magnetic field.

- 46 The minimum energy required to launch a satellite of mass  $m$  from the surface of earth of mass  $M$  and radius  $R$  in a circular orbit at an altitude of  $2R$  from the surface of the earth is:

- (1)  $\frac{GmM}{2R}$  (2)  $\frac{GmM}{3R}$

- (3)  $\frac{5GmM}{6R}$  (4)  $\frac{2GmM}{3R}$

**Chemistry : Section-A (Q. No. 51 to 85)**

47 If the plates of a parallel plate capacitor connected to a battery are moved close to each other, then  
 A. the charge stored in it, increases.  
 B. the energy stored in it, decreases.  
 C. its capacitance increases.  
 D. the ratio of charge to its potential remains the same.  
 E. the product of charge and voltage increases.  
 Choose the most appropriate answer from the options given below:

- (1) B, D and E only (2) A, B and C only  
 (3) A, B and E only (4) A, C and E only

48 A force defined by  $F = \alpha t^2 + \beta t$  acts on a particle at a given time  $t$ . The factor which is dimensionless, if  $\alpha$  and  $\beta$  are constants, is:

- (1)  $\alpha\beta t$  (2)  $\frac{\alpha\beta}{t}$   
 (3)  $\frac{\beta t}{\alpha}$  (4)  $\frac{\alpha t}{\beta}$

49 A sheet is placed on a horizontal surface in front of a strong magnetic pole. A force is needed to :  
 A. hold the sheet there if it is magnetic.  
 B. hold the sheet there if it is non-magnetic.  
 C. move the sheet away from the pole with uniform velocity if it is conducting.  
 D. move the sheet away from the pole with uniform velocity if it is both, non-conducting and non-polar.

Choose the correct statement(s) from the options given below:

- (1) A, C and D only  
 (2) C only  
 (3) B and D only  
 (4) A and C only

50 An iron bar of length  $l$ , has magnetic moment  $M$ . It is bent at the middle of its length such that the two arms make an angle  $60^\circ$  with each other. The magnetic moment of this new magnet is:

- (1)  $2M$  (2)  $\frac{M}{\sqrt{3}}$   
 (3)  $M$  (4)  $\frac{M}{2}$

51 Match List I with List II.

List I (Process)	List II (Conditions)
A. Isothermal process	I. No heat exchange
B. Isochoric process	II. Carried out at constant temperature
C. Isobaric process	III. Carried out at constant volume
D. Adiabatic process	IV. Carried out at constant pressure

Choose the correct answer from the options given below:

- (1) A-I, B-II, C-III, D-IV  
 (2) A-II, B-III, C-IV, D-I  
 (3) A-IV, B-III, C-II, D-I  
 (4) A-IV, B-II, C-III, D-I

52 Given below are two statements:

**Statement I :** The boiling point of three isomeric pentanes follows the order  
 $n\text{-pentane} > \text{isopentane} > \text{neopentane}$

**Statement II :** When branching increases, the molecule attains a shape of sphere. This results in smaller surface area for contact, due to which the intermolecular forces between the spherical molecules are weak, thereby lowering the boiling point.

In the light of the above statements, choose the most appropriate answer from the options given below:

- (1) Statement I is correct but Statement II is incorrect.  
 (2) Statement I is incorrect but Statement II is correct.  
 (3) Both Statement I and Statement II are correct.  
 (4) Both Statement I and Statement II are incorrect.



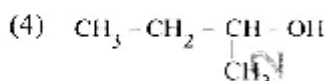
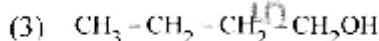
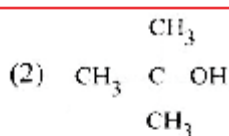
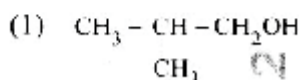
53 Match List I with List II.

List I (Molecule)	List II (Number and types of bond/s between two carbon atoms)
A. ethane	I. one $\sigma$ -bond and two $\pi$ -bonds
B. ethene	II. two $\pi$ -bonds
C. carbon molecule, $C_2$	III. one $\sigma$ -bond
D. ethyne	IV. one $\sigma$ -bond and one $\pi$ -bond

Choose the correct answer from the options given below:

- (1) A-III, B-IV, C-II, D-I  
(2) A-III, B-IV, C-I, D-II  
(3) A-I, B-IV, C-II, D-III  
(4) A-IV, B-III, C-II, D-I

54 Which one of the following alcohols reacts instantaneously with Lucas reagent?



55 Match List I with List II.

List I Quantum Number	List II Information provided
A. $m_l$	I. shape of orbital
B. $m_s$	II. size of orbital
C. $l$	III. orientation of orbital
D. $n$	IV. orientation of spin of electron

Choose the correct answer from the options given below:

- (1) A-III, B-IV, C-II, D-I  
(2) A-II, B-I, C-IV, D-III  
(3) A-I, B-III, C-II, D-IV  
(4) A-III, B-IV, C-I, D-II

56 'Spin only' magnetic moment is same for which of the following ions?

- A.  $Ti^{3+}$                       B.  $Cr^{2+}$   
C.  $Mn^{2+}$                     D.  $Fe^{2+}$   
E.  $Sc^{3+}$

Choose the most appropriate answer from the options given below:

- (1) B and C only  
(2) A and D only  
(3) B and D only  
(4) A and E only

57 On heating, some solid substances change from solid to vapour state without passing through liquid state. The technique used for the purification of such solid substances based on the above principle is known as

- (1) Distillation  
(2) Chromatography  
(3) Crystallization

(4) Sublimation

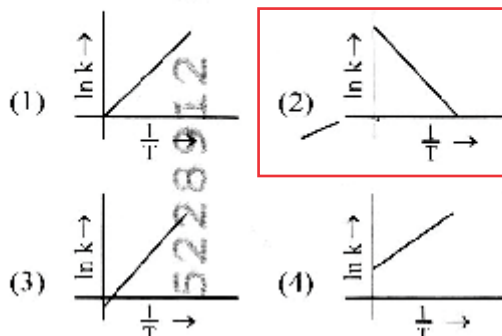
58 The energy of an electron in the ground state ( $n = 1$ ) for  $He^+$  ion is  $-x$  J, then that for an electron in  $n = 2$  state for  $Be^{3+}$  ion in J is :

- (1)  $4x$                       (2)  $\frac{4}{9}x$   
(3)  $-x$                       (4)  $-\frac{x}{9}$

59 Activation energy of any chemical reaction can be calculated if one knows the value of

- (1) orientation of reactant molecules during collision  
(2) rate constant at two different temperatures.  
(3) rate constant at standard temperature.  
(4) probability of collision.

60 Which plot of  $\ln k$  vs  $\frac{1}{T}$  is consistent with Arrhenius equation?



61 Given below are two statements:  
**Statement I** : The boiling point of hydrides of Group 16 elements follow the order  $H_2O > H_2Te > H_2Se > H_2S$ .

**Statement II** : On the basis of molecular mass,  $H_2O$  is expected to have lower boiling point than the other members of the group but due to the presence of extensive H-bonding in  $H_2O$ , it has higher boiling point.

In the light of the above statements, choose the correct answer from the options given below:

- (1) Statement I is true but Statement II is false.  
(2) Statement I is false but Statement II is true.  
(3) Both Statement I and Statement II are true.  
(4) Both Statement I and Statement II are false.

62 The reagents with which glucose does not react to give the corresponding tests/products are

- A. Tollen's reagent  
B. Schiff's reagent  
C. HCN  
D.  $NH_2OH$   
E.  $NaHSO_3$

Choose the correct options from the given below:

- (1) B and E (2) E and D  
(3) B and C (4) A and D

63 Arrange the following elements in increasing order of first ionization enthalpy:

Li, Be, B, C, N

Choose the correct answer from the options given below:

- (1)  $Li < Be < C < B < N$   
(2)  $Li < Be < N < B < C$   
(3)  $Li < Be < B < C < N$   
(4)  $Li < B < Be < C < N$

64 Arrange the following elements in increasing order of electronegativity:

N, O, F, C, Si

Choose the correct answer from the options given below:

- (1)  $O < F < N < C < Si$   
(2)  $F < O < N < C < Si$   
(3)  $Si < C < N < O < F$   
(4)  $Si < C < O < N < F$

65 The  $E^\circ$  value for the  $Mn^{3+}/Mn^{2+}$  couple is more positive than that of  $Cr^{3+}/Cr^{2+}$  or  $Fe^{3+}/Fe^{2+}$  due to change of

- (1)  $d^4$  to  $d^5$  configuration  
(2)  $d^3$  to  $d^5$  configuration  
(3)  $d^5$  to  $d^4$  configuration  
(4)  $d^5$  to  $d^2$  configuration

66 Match List I with List II.

List I (Compound)	List II (Shape/geometry)
A. $NH_3$	I. Trigonal Pyramidal
B. $BrF_5$	II. Square Planar
C. $XeF_4$	III. Octahedral
D. $SF_6$	IV. Square Pyramidal

Choose the correct answer from the options given below:

- (1) A-III, B-IV, C-I, D-II  
(2) A-II, B-III, C-IV, D-I  
(3) A-I, B-IV, C-II, D-III  
(4) A-II, B-IV, C-III, D-I

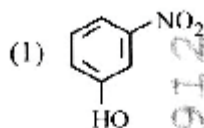
67 Match List I with List II.

List I (Complex)	List II (Type of isomerism)
A. $[Co(NH_3)_5(NO_2)]Cl_2$	I. Solvate isomerism
B. $[Co(NH_3)_5(SO_4)]Br$	II. Linkage isomerism
C. $[Co(NH_3)_6] [Cr(CN)_6]$	III. Ionization isomerism
D. $[Co(H_2O)_6]Cl_3$	IV. Coordination isomerism

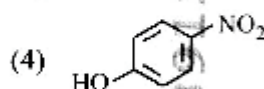
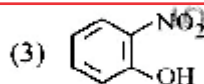
Choose the correct answer from the options given below:

- (1) A-I, B-IV, C-III, D-II  
(2) A-II, B-IV, C-III, D-I  
(3) A-II, B-III, C-IV, D-I  
(4) A-I, B-III, C-IV, D-II

68 Intramolecular hydrogen bonding is present in



(2) HF



69 Given below are two statements:

**Statement I :** Aniline does not undergo Friedel-Crafts alkylation reaction.

**Statement II :** Aniline cannot be prepared through Gabriel synthesis.

In the light of the above statements, choose the correct answer from the options given below:

(1) Statement I is correct but Statement II is false.

(2) Statement I is incorrect but Statement II is true.

(3) Both Statement I and Statement II are true.

(4) Both Statement I and Statement II are false.

70 The highest number of helium atoms is in

(1) 4 g of helium

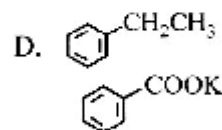
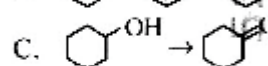
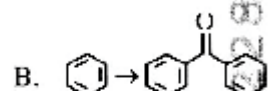
(2) 2.271098 L of helium at STP

(3) 4 mol of helium

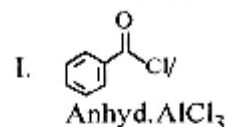
(4) 4 u of helium

71 Match List I with List II.

List I (Reaction)



List II (Reagents/Condition)



II.  $\text{CrO}_3$

III.  $\text{KMnO}_4 / \text{KOH}, \Delta$

IV. (i)  $\text{O}_3$

(ii)  $\text{Zn-H}_2\text{O}$

Choose the correct answer from the options given below:

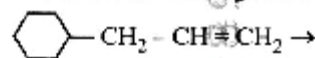
(1) A-IV, B-I, C-II, D-III

(2) A-I, B-IV, C-II, D-III

(3) A-IV, B-I, C-III, D-II

(4) A-III, B-I, C-II, D-IV

72 Identify the correct reagents that would bring about the following transformation.



(1) (i)  $\text{BH}_3$

(ii)  $\text{H}_2\text{O}_2 / \text{OH}^-$

(iii) alk.  $\text{KMnO}_4$

(iv)  $\text{H}_3\text{O}^+$

(2) (i)  $\text{H}_2\text{O}/\text{H}^+$

(ii) PCC

(3) (i)  $\text{H}_2\text{O}/\text{H}^+$

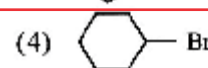
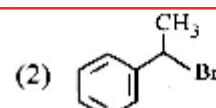
(ii)  $\text{CrO}_2$

(4) (i)  $\text{BH}_3$

(ii)  $\text{H}_2\text{O}_2 / \text{OH}^-$

(iii) PCC

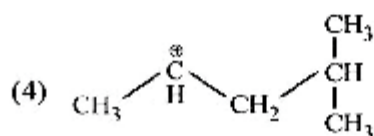
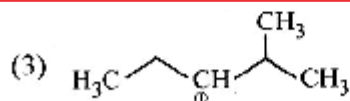
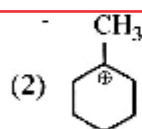
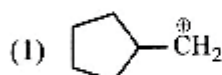
73 The compound that will undergo  $\text{S}_{\text{N}}1$  reaction with the fastest rate is





- 74 Fehling's solution 'A' is
- (1) alkaline solution of sodium potassium tartrate (Rochelle's salt)
  - (2) aqueous sodium citrate
  - (3) aqueous copper sulphate
  - (4) alkaline copper sulphate

- 75 The most stable carbocation among the following is:



- 76 For the reaction  $2A \rightleftharpoons B + C$ ,  $K_c = 4 \times 10^{-3}$ . At a given time, the composition of reaction mixture is:  $[A] = [B] = [C] = 2 \times 10^{-3} M$ .

Then, which of the following is correct?

- (1) Reaction has a tendency to go in backward direction.
- (2) Reaction has gone to completion in forward direction.
- (3) Reaction is at equilibrium.
- (4) Reaction has a tendency to go in forward direction.

- 77 The Henry's law constant ( $K_H$ ) values of three gases (A, B, C) in water are 145,  $2 \times 10^{-5}$  and 35 kbar, respectively. The solubility of these gases in water follow the order:

- (1)  $A > C > B$
- (2)  $A > B > C$
- (3)  $B > A > C$
- (4)  $B > C > A$

- 78 A compound with a molecular formula of  $C_6H_{14}$  has two tertiary carbons. Its IUPAC name is:

- (1) 2,3-dimethylbutane
- (2) 2,2-dimethylbutane
- (3) n-hexane
- (4) 2-methylpentane

- 79 In which of the following equilibria,  $K_p$  and  $K_c$  are NOT equal?

- (1)  $CO_{(g)} + H_2O_{(g)} \rightleftharpoons CO_{2(g)} + H_{2(g)}$
- (2)  $2 BrCl_{(g)} \rightleftharpoons Br_{2(g)} + Cl_{2(g)}$
- (3)  $PCl_{5(g)} \rightleftharpoons PCl_{3(g)} + Cl_{2(g)}$
- (4)  $H_{2(g)} + I_{2(g)} \rightleftharpoons 2 HI_{(g)}$

- 80 Which reaction is NOT a redox reaction?

- (1)  $H_2 + Cl_2 \rightarrow 2 HCl$
- (2)  $BaCl_2 + Na_2SO_4 \rightarrow BaSO_4 + 2 NaCl$
- (3)  $Zn + CuSO_4 \rightarrow ZnSO_4 + Cu$
- (4)  $2 KClO_3 + I_2 \rightarrow 2 KIO_3 + Cl_2$

- 81 Given below are two statements :

**Statement I :** Both  $[Co(NH_3)_6]^{3+}$  and  $[CoF_6]^{3-}$  complexes are octahedral but differ in their magnetic behaviour.

**Statement II :**  $[Co(NH_3)_6]^{3+}$  is diamagnetic whereas  $[CoF_6]^{3-}$  is paramagnetic.

In the light of the above statements, choose the correct answer from the options given below:

- (1) Statement I is true but Statement II is false.
- (2) Statement I is false but Statement II is true.
- (3) Both Statement I and Statement II are true.
- (4) Both Statement I and Statement II are false.

- 82 1 gram of sodium hydroxide was treated with 25 mL of 0.75 M HCl solution, the mass of sodium hydroxide left unreacted is equal to

- (1) Zero mg
- (2) 200 mg
- (3) 750 mg
- (4) 250 mg

Chemistry : Section-B (Q. No. 86 to 100)

83 Among Group 16 elements, which one does NOT show -2 oxidation state?

- (1) Te (2) Po  
(3) O (4) Se

84 In which of the following processes entropy increases?

- A. A liquid evaporates to vapour.  
B. Temperature of a crystalline solid lowered from 130 K to 0 K.  
C.  $2 \text{NaHCO}_3(s) \rightarrow \text{Na}_2\text{CO}_3(s) + \text{CO}_2(g) + \text{H}_2\text{O}(g)$   
D.  $\text{Cl}_{2(g)} \rightarrow 2 \text{Cl}(g)$

Choose the correct answer from the options given below:

- (1) A, C and D (2) C and D  
(3) A and C (4) A, B and D

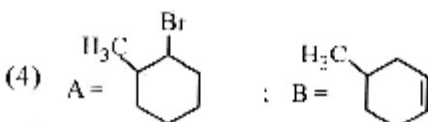
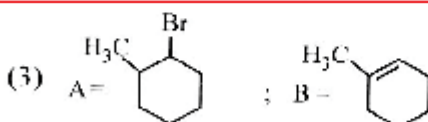
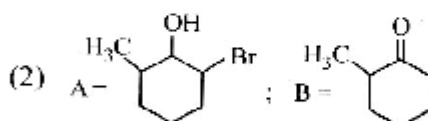
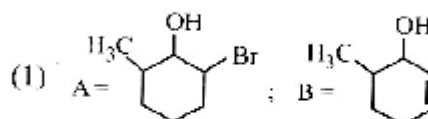
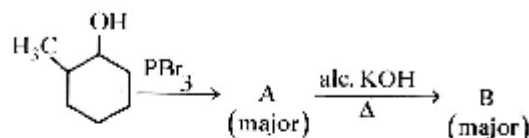
85 Match List I with List II.

List I (Conversion)	List II (Number of Faraday required)
A. 1 mol of $\text{H}_2\text{O}$ to $\text{O}_2$	I. 3F
B. 1 mol of $\text{MnO}_4^-$ to $\text{Mn}^{2+}$	II. 2F
C. 1.5 mol of Ca from molten $\text{CaCl}_2$	III. 1F
D. 1 mol of $\text{FeO}$ to $\text{Fe}_2\text{O}_3$	IV. 5F

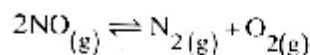
Choose the correct answer from the options given below:

- (1) A-II, B-III, C-I, D-IV  
(2) A-III, B-IV, C-II, D-I  
(3) A-II, B-IV, C-I, D-III  
(4) A-III, B-IV, C-I, D-II

86 Major products A and B formed in the following reaction sequence, are



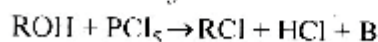
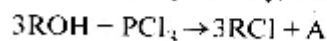
87 Consider the following reaction in a sealed vessel at equilibrium with concentrations of  $\text{N}_2 = 3.0 \times 10^{-3} \text{ M}$ ,  $\text{O}_2 = 4.2 \times 10^{-3} \text{ M}$  and  $\text{NO} = 2.8 \times 10^{-3} \text{ M}$ .



If  $0.1 \text{ mol L}^{-1}$  of  $\text{NO}(g)$  is taken in a closed vessel, what will be degree of dissociation ( $\alpha$ ) of  $\text{NO}(g)$  at equilibrium?

- (1) 0.8889 (2) 0.717  
(3) 0.00889 (4) 0.0889

88 The products A and B obtained in the following reactions, respectively, are



- (1)  $\text{H}_3\text{PO}_4$  and  $\text{POCl}_3$   
(2)  $\text{H}_3\text{PO}_3$  and  $\text{POCl}_3$   
(3)  $\text{POCl}_3$  and  $\text{H}_3\text{PO}_3$   
(4)  $\text{POCl}_3$  and  $\text{H}_3\text{PO}_4$

0/1  
7/2

89 Given below are certain cations. Using inorganic qualitative analysis, arrange them in increasing group number from 0 to VI.

- A.  $Al^{3+}$                       B.  $Cu^{2+}$   
C.  $Ba^{2+}$                       D.  $Co^{2+}$   
E.  $Mg^{2+}$

Choose the correct answer from the options given below:

- (1) E, C, D, B, A  
(2) E, A, B, C, D  
(3) B, A, D, C, E  
(4) B, C, A, D, E

90 During the preparation of Mohr's salt solution (Ferrous ammonium sulphate), which of the following acid is added to prevent hydrolysis of  $Fe^{2+}$  ion?

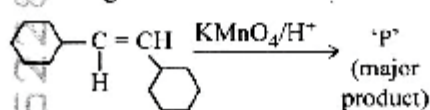
- (1) dilute nitric acid  
(2) dilute sulphuric acid  
(3) dilute hydrochloric acid  
(4) concentrated sulphuric acid

91 The work done during reversible isothermal expansion of one mole of hydrogen gas at  $25^\circ C$  from pressure of 20 atmosphere to 10 atmosphere is:

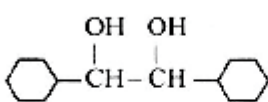
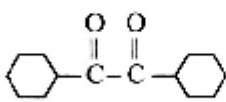
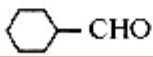
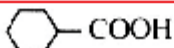
(Given  $R = 2.0 \text{ cal K}^{-1} \text{ mol}^{-1}$ )

- (1) 413.14 calories  
(2) 100 calories  
(3) 0 calorie  
(4) -413.14 calories

92 For the given reaction:



'P' is

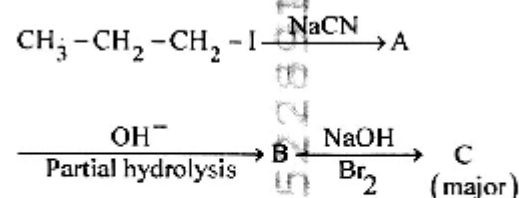
- (1)   
(2)   
(3)   
(4) 

93 The plot of osmotic pressure ( $\Pi$ ) vs concentration ( $\text{mol L}^{-1}$ ) for a solution gives a straight line with slope  $25.73 \text{ L bar mol}^{-1}$ . The temperature at which the osmotic pressure measurement is done is:

(Use  $R = 0.083 \text{ L bar mol}^{-1} \text{ K}^{-1}$ )

- (1)  $25.73^\circ C$                       (2)  $12.05^\circ C$   
(3)  $37^\circ C$                         (4)  $310^\circ C$

94 Identify the major product C formed in the following reaction sequence :



- (1) butanamide  
(2)  $\alpha$ -bromobutanoic acid  
(3) propylamine  
(4) butylamine

95 A compound X contains 32% of A, 20% of B and remaining percentage of C. Then, the empirical formula of X is :

(Given atomic masses of A = 64; B = 40; C = 32 u)

- (1)  $AB_2C_2$                         (2)  $ABC_4$   
(3)  $A_2BC_2$                         (4)  $ABC_3$

96 The rate of a reaction quadruples when temperature changes from  $27^\circ C$  to  $57^\circ C$ . Calculate the energy of activation.

Given  $R = 8.314 \text{ J K}^{-1} \text{ mol}^{-1}$ ,  $\log 4 = 0.6021$

- (1) 3.80 kJ/mol  
(2) 3804 kJ/mol  
(3) 38.04 kJ/mol  
(4) 380.4 kJ/mol



- 97 Identify the correct answer.
- (1) Dipole moment of  $\text{NF}_3$  is greater than that of  $\text{NH}_3$ .
  - (2) Three canonical forms can be drawn for  $\text{CO}_3^{2-}$  ion.
  - (3) Three resonance structures can be drawn for ozone.
  - (4)  $\text{BF}_3$  has non-zero dipole moment.

- 98 The pair of lanthanoid ions which are diamagnetic is
- (1)  $\text{Gd}^{3+}$  and  $\text{Eu}^{3+}$
  - (2)  $\text{Pm}^{3+}$  and  $\text{Sm}^{3+}$
  - (3)  $\text{Ce}^{4+}$  and  $\text{Yb}^{2+}$
  - (4)  $\text{Ce}^{3+}$  and  $\text{Eu}^{2+}$

- 99 Given below are two statements :

**Statement I :**  $[\text{Co}(\text{NH}_3)_6]^{3+}$  is a homoleptic complex whereas  $[\text{Co}(\text{NH}_3)_4\text{Cl}_2]^+$  is a heteroleptic complex.

**Statement II :** Complex  $[\text{Co}(\text{NH}_3)_6]^{3+}$  has only one kind of ligands but  $[\text{Co}(\text{NH}_3)_4\text{Cl}_2]^+$  has more than one kind of ligands.

In the light of the above statements, choose the correct answer from the options given below:

- (1) Statement I is true but Statement II is false.
- (2) Statement I is false but Statement II is true.
- (3) Both Statement I and Statement II are true.
- (4) Both Statement I and Statement II are false.


- 100 Mass in grams of copper deposited by passing 9.6487 A current through a voltmeter containing copper sulphate solution for 100 seconds is:

(Given : Molar mass of  $\text{Cu} : 63 \text{ g mol}^{-1}$ ,  $1F = 96487 \text{ C}$ )

- (1) 31.5 g
- (2) 0.0315 g
- (3) 3.15 g
- (4) 0.315 g

**Botany : Section-A (Q. No. 101 to 135)**

- 101 In the given figure, which component has thin outer walls and highly thickened inner walls?



- (1) A
- (2) B
- (3) C
- (4) D

- 102 List of endangered species was released by-

- (1) FOAM
- (2) IUCN
- (3) GEAC
- (4) WWF

- 103 The type of conservation in which the threatened species are taken out from their natural habitat and placed in special setting where they can be protected and given special care is called;

- (1) Semi-conservative method
- (2) Sustainable development
- (3) *in-situ* conservation
- (4) Biodiversity conservation

- 104 Which one of the following can be explained on the basis of Mendel's Law of Dominance?

- A. Out of one pair of factors one is dominant and the other is recessive.
- B. Alleles do not show any expression and both the characters appear as such in  $F_2$  generation.
- C. Factors occur in pairs in normal diploid plants.
- D. The discrete unit controlling a particular character is called factor.
- E. The expression of only one of the parental characters is found in a monohybrid cross.

Choose the correct answer from the options given below:

- (1) B, C and D only
- (2) A, B, C, D and E
- (3) A, B and C only
- (4) A, C, D and E only

105 The lactose present in the growth medium of bacteria is transported to the cell by the action of:

- (1) Permease
- (2) Polymerase
- (3) Beta-galactosidase
- (4) Acetylase

106 Match List I with List II

List I	List II
A. <i>Clostridium butylicum</i>	I. Ethanol
B. <i>Saccharomyces cerevisiae</i>	II. Streptokinase
C. <i>Trichoderma polysporum</i>	III. Butyric acid
D. <i>Streptococcus</i> sp.	IV. Cyclosporin-A

Choose the correct answer from the options given below:

- (1) A-III, B-I, C-IV, D-II
- (2) A-IV, B-I, C-III, D-II
- (3) A-III, B-I, C-II, D-IV
- (4) A-II, B-IV, C-III, D-I

107 The equation of Verhulst-Pearl logistic growth is

$$\frac{dN}{dt} = rN \left[ \frac{K-N}{K} \right]$$

From this equation, K indicates:

- (1) Carrying capacity
- (2) Population density
- (3) Intrinsic rate of natural increase
- (4) Biotic potential

108 A transcription unit in DNA is defined primarily by the three regions in DNA and these are with respect to upstream and downstream end;

- (1) Inducer, Repressor, Structural gene
- (2) Promotor, Structural gene, Terminator
- (3) Repressor, Operator gene, Structural gene
- (4) Structural gene, Transposons, Operator gene

109 Formation of interfascicular cambium from fully developed parenchyma cells is an example for

- (1) Dedifferentiation
- (2) Maturation
- (3) Differentiation
- (4) Redifferentiation

110 Match List I with List II

List I	List II
A. <i>Rhizopus</i>	I. Mushroom
B. <i>Ustilago</i>	II. Smut fungus
C. <i>Puccinia</i>	III. Bread mould
D. <i>Agaricus</i>	IV. Rust fungus

Choose the correct answer from the options given below:

- (1) A-III, B-II, C-I, D-IV
- (2) A-IV, B-III, C-II, D-I
- (3) A-III, B-II, C-IV, D-I
- (4) A-I, B-III, C-II, D-IV

111 What is the fate of a piece of DNA carrying only gene of interest which is transferred into an alien organism?

- A. The piece of DNA would be able to multiply itself independently in the progeny cells of the organism.
- B. It may get integrated into the genome of the recipient.
- C. It may multiply and be inherited along with the host DNA.
- D. The alien piece of DNA is not an integral part of chromosome.
- E. It shows ability to replicate.

Choose the correct answer from the options given below:

- (1) B and C only
- (2) A and E only
- (3) A and B only
- (4) D and E only

112 Match List I with List II

List I	List II
A. Nucleolus	I. Site of formation of glycolipid
B. Centriole	II. Organization like the cartwheel
C. Leucoplasts	III. Site for active ribosomal RNA synthesis
D. Golgi apparatus	IV. For storing nutrients

Choose the correct answer from the options given below:

- (1) A-III, B-IV, C-II, D-I
- (2) A-I, B-II, C-III, D-IV
- (3) A-III, B-II, C-IV, D-I
- (4) A-II, B-III, C-I, D-IV



- 113 Identify the type of flowers based on the position of calyx, corolla and androecium with respect to the ovary from the given figures (a) and (b)



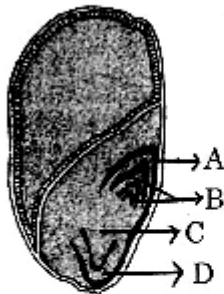
- (1) (a) Perigynous; (b) Epigynous  
 (2) (a) Perigynous; (b) Perigynous  
 (3) (a) Epigynous; (b) Hypogynous  
 (4) (a) Hypogynous; (b) Epigynous
- 114 Spindle fibers attach to kinetochores of chromosomes during
- (1) Anaphase (2) Telophase  
 (3) Prophase (4) Metaphase
- 115 These are regarded as major causes of biodiversity loss:
- A. Over exploitation  
 B. Co-extinction  
 C. Mutation  
 D. Habitat loss and fragmentation  
 E. Migration
- Choose the correct option:
- (1) A, B and E only  
 (2) A, B and D only  
 (3) A, C and D only  
 (4) A, B, C and D only
- 116 Lecithin, a small molecular weight organic compound found in living tissues, is an example of:
- (1) Glycerides  
 (2) Carbohydrates  
 (3) Amino acids  
 (4) Phospholipids

- 117 Identify the set of correct statements:
- A. The flowers of *Vallisneria* are colourful and produce nectar.  
 B. The flowers of waterlily are not pollinated by water.  
 C. In most of water-pollinated species, the pollen grains are protected from wetting.  
 D. Pollen grains of some hydrophytes are long and ribbon like.  
 E. In some hydrophytes, the pollen grains are carried passively inside water.
- Choose the correct answer from the options given below:
- (1) A, C, D and E only  
 (2) B, C, D and E only  
 (3) C, D and E only  
 (4) A, B, C and D only
- 118 The cofactor of the enzyme carboxypeptidase is:
- (1) Flavin (2) Haem  
 (3) Zinc (4) Niacin
- 119 Inhibition of Succinic dehydrogenase enzyme by malonate is a classical example of:
- (1) Competitive inhibition  
 (2) Enzyme activation  
 (3) Cofactor inhibition  
 (4) Feedback inhibition
- 120 Which of the following is an example of actinomorphic flower?
- (1) *Pisum* (2) *Sesbania*  
 (3) *Datura* (4) *Cassia*
- 121 Given below are two statements:
- Statement I** : Chromosomes become gradually visible under light microscope during leptotene stage.  
**Statement II** : The beginning of diplotene stage is recognized by dissolution of synaptonemal complex.
- In the light of the above statements, choose the correct answer from the options given below:
- (1) Statement I is true but Statement II is false  
 (2) Statement I is false but Statement II is true  
 (3) Both Statement I and Statement II are true  
 (4) Both Statement I and Statement II are false



- 122 A pink flowered Snapdragon plant was crossed with a red flowered Snapdragon plant. What type of phenotype/s is/are expected in the progeny?  
 (1) Only pink flowered plants  
 (2) Red, Pink as well as white flowered plants  
 (3) Only red flowered plants  
 (4) Red flowered as well as pink flowered plants
- 123 Given below are two statements:  
**Statement I** : Parenchyma is living but collenchyma is dead tissue.  
**Statement II** : Gymnosperms lack xylem vessels but presence of xylem vessels is the characteristic of angiosperms.  
 In the light of the above statements, choose the correct answer from the options given below:  
 (1) Statement I is true but Statement II is false  
 (2) Statement I is false but Statement II is true  
 (3) Both Statement I and Statement II are true  
 (4) Both Statement I and Statement II are false
- 124 Given below are two statements:  
**Statement I** : Bt toxins are insect group specific and coded by a gene *cry* IAc.  
**Statement II** : Bt toxin exists as inactive protoxin in *B. thuringiensis*. However, after ingestion by the insect the inactive protoxin gets converted into active form due to acidic pH of the insect gut.  
 In the light of the above statements, choose the correct answer from the options given below:  
 (1) Statement I is true but Statement II is false  
 (2) Statement I is false but Statement II is true  
 (3) Both Statement I and Statement II are true  
 (4) Both Statement I and Statement II are false
- 125 Which one of the following is not a criterion for classification of fungi?  
 (1) Mode of spore formation  
 (2) Fruiting body  
 (3) Morphology of mycelium  
 (4) Mode of nutrition
- 126 The capacity to generate a whole plant from any cell of the plant is called:  
 (1) Differentiation  
 (2) Somatic hybridization  
 (3) Totipotency  
 (4) Micropropagation
- 127 Which of the following are required for the dark reaction of photosynthesis?  
 A. Light  
 B. Chlorophyll  
 C. CO<sub>2</sub>  
 D. ATP  
 E. NADPH  
 Choose the correct answer from the options given below:  
 (1) C, D and E only  
 (2) D and E only  
 (3) A, B and C only  
 (4) B, C and D only
- 128 Tropical regions show greatest level of species richness because  
 A. Tropical latitudes have remained relatively undisturbed for millions of years, hence more time was available for species diversification.  
 B. Tropical environments are more seasonal.  
 C. More solar energy is available in tropics.  
 D. Constant environments promote niche specialization.  
 E. Tropical environments are constant and predictable.  
 Choose the correct answer from the options given below:  
 (1) A, B and E only  
 (2) A, B and D only  
 (3) A, C, D and E only  
 (4) A and B only

- 129 Identify the part of the seed from the given figure which is destined to form root when the seed germinates.



- (1) C • (2) D  
(3) A (4) B

- 130 How many molecules of ATP and NADPH are required for every molecule of  $\text{CO}_2$  fixed in the Calvin cycle?

- (1) 3 molecules of ATP and 3 molecules of NADPH  
• (2) 3 molecules of ATP and 2 molecules of NADPH  
(3) 2 molecules of ATP and 3 molecules of NADPH  
(4) 2 molecules of ATP and 2 molecules of NADPH

- 131 In a plant, black seed color (BB/Bb) is dominant over white seed color (bb). In order to find out the genotype of the black seed plant, with which of the following genotype will you cross it?

- (1) Bb (2) BB/Bb  
(3) BB • (4) bb

- 132 Hind II always cuts DNA molecules at a particular point called recognition sequence and it consists of:

- (1) 4 bp (2) 10 bp  
(3) 8 bp • (4) 6 bp

- 133 Bulliform cells are responsible for

- (1) Increased photosynthesis in monocots.  
(2) Providing large spaces for storage of sugars.  
• (3) Inward curling of leaves in monocots.  
(4) Protecting the plant from salt stress.

- 134 Match List I with List II

List I		List II
A. Two or more alternative forms of a gene	I.	Back cross
B. Cross of $F_1$ progeny with homozygous recessive parent	II.	Ploidy
C. Cross of $F_1$ progeny with any of the parents	III.	Allele
D. Number of chromosome sets in plant	IV.	Test cross

Choose the correct answer from the options given below:

- (1) A-III, B-IV, C-I, D-II  
(2) A-IV, B-III, C-II, D-I  
(3) A-I, B-II, C-III, D-IV  
(4) A-II, B-I, C-III, D-IV

- 135 Auxin is used by gardeners to prepare weed-free lawns. But no damage is caused to grass as auxin

- (1) does not affect mature monocotyledonous plants.  
(2) can help in cell division in grasses, to produce growth.  
(3) promotes apical dominance.  
(4) promotes abscission of mature leaves only.

136 Match List I with List II

List I	List II
A. Rose	I. Twisted aestivation
B. Pea	II. Perigynous flower
C. Cotton	III. Drupe
D. Mango	IV. Marginal placentation

Choose the correct answer from the options given below:

- (1) A-IV, B-III, C-II, D-I  
 (2) A-II, B-III, C-IV, D-I  
 • (3) A-II, B-IV, C-I, D-III  
 (4) A-I, B-II, C-III, D-IV

137 The DNA present in chloroplast is:

- (1) Linear, single stranded  
 (2) Circular, single stranded  
 (3) Linear, double stranded  
 • (4) Circular, double stranded •

138 Identify the correct description about the given figure:



- (1) Cleistogamous flowers showing autogamy.  
 (2) Compact inflorescence showing complete autogamy.  
 • (3) Wind pollinated plant inflorescence showing flowers with well exposed stamens.  
 (4) Water pollinated flowers showing stamens with mucilaginous covering.

139 Match List I with List II

List I	List II
A. Robert May	I. Species-Area relationship
B. Alexander von Humboldt	II. Long term ecosystem experiment using out door plots
C. Paul Ehrlich	III. Global species diversity at about 7 million
D. David Tilman	IV. Rivet popper hypothesis

Choose the correct answer from the options given below:

- (1) A-I, B-III, C-II, D-IV  
 (2) A-III, B-IV, C-II, D-I  
 (3) A-II, B-III, C-I, D-IV  
 • (4) A-III, B-I, C-IV, D-II

140 Given below are two statements:

**Statement I :** In  $C_3$  plants, some  $O_2$  binds to RuBisCO, hence  $CO_2$  fixation is decreased.

**Statement II :** In  $C_4$  plants, mesophyll cells show very little photorespiration while bundle sheath cells do not show photorespiration.

In the light of the above statements, choose the correct answer from the options given below:

- (1) Statement I is true but Statement II is false  
 (2) Statement I is false but Statement II is true  
 (3) Both Statement I and Statement II are true  
 (4) Both Statement I and Statement II are false

141 Identify the step in tricarboxylic acid cycle, which does not involve oxidation of substrate.

- (1) Succinyl-CoA  $\rightarrow$  Succinic acid  
 (2) Isocitrate  $\rightarrow$   $\alpha$ -ketoglutaric acid  
 (3) Malic acid  $\rightarrow$  Oxaloacetic acid  
 (4) Succinic acid  $\rightarrow$  Malic acid



**142 Match List I with List II**

<b>List I</b>	<b>List II</b>
A. Citric acid cycle	I. Cytoplasm
B. Glycolysis	II. Mitochondrial matrix
C. Electron transport system	III. Intermembrane space of mitochondria
D. Proton gradient	IV. Inner mitochondrial membrane

Choose the correct answer from the options given below:

- (1) A-III, B-IV, C-I, D-II
- (2) A-IV, B-III, C-II, D-I
- (3) A-I, B-II, C-III, D-IV
- (4) A-II, B-I, C-IV, D-III •

**143 Which of the following are fused in somatic hybridization involving two varieties of plants?**

- (1) Protoplasts
- (2) Pollens
- (3) Callus
- (4) Somatic embryos

**144 Match List I with List II**

<b>List I</b>	<b>List II</b>
A. GLUT-4	I. Hormone
B. Insulin	II. Enzyme
C. Trypsin	III. Intercellular ground substance
D. Collagen	IV. Enables glucose transport into cells

Choose the correct answer from the options given below:

- (1) A-II, B-III, C-IV, D-I
- (2) A-III, B-IV, C-I, D-II
- (3) A-IV, B-I, C-II, D-III •
- (4) A-I, B-II, C-III, D-IV

**145 Match List I with List II**

<b>List I</b> (Types of Stamens)	<b>List II</b> (Example)
A. Monoadelphous	I. Citrus
B. Diadelphous	II. Pea
C. Polyadelphous	III. Lily
D. Epiphyllous	IV. China-rose

Choose the correct answer from the options given below:

- (1) A-I, B-II, C-IV, D-III
- (2) A-III, B-I, C-IV, D-II
- (3) A-IV, B-II, C-I, D-III
- (4) A-IV, B-I, C-II, D-III

**146 Read the following statements and choose the set of correct statements:**

In the members of Phaeophyceae,

- A. Asexual reproduction occurs usually by biflagellate zoospores.
- B. Sexual reproduction is by oogamous method only.
- C. Stored food is in the form of carbohydrates which is either mannitol or laminarin.
- D. The major pigments found are chlorophyll a, c and carotenoids and xanthophyll.
- E. Vegetative cells have a cellulosic wall, usually covered on the outside by gelatinous coating of algin.

Choose the correct answer from the options given below:

- (1) A, C, D and E only
- (2) A, B, C and E only
- (3) A, B, C and D only
- (4) B, C, D and E only

**147 Match List I with List II**

<b>List I</b>	<b>List II</b>
A. Frederick Griffith	I. Genetic code
B. Francois Jacob & Jacques Monod	II. Semi-conservative mode of DNA replication
C. Har Gobind Khorana	III. Transformation
D. Meselson & Stahl	IV. <i>Lac</i> operon

Choose the correct answer from the options given below:

- (1) A-II, B-III, C-IV, D-I
- (2) A-IV, B-I, C-II, D-III
- (3) A-III, B-II, C-I, D-IV
- (4) A-III, B-IV, C-I, D-II

148 Which of the following statement is correct regarding the process of replication in *E.coli*?

- (1) The DNA dependent DNA polymerase catalyses polymerization in  $5' \rightarrow 3'$  as well as  $3' \rightarrow 5'$  direction.
- (2) The DNA dependent DNA polymerase catalyses polymerization in  $5' \rightarrow 3'$  direction.
- (3) The DNA dependent DNA polymerase catalyses polymerization in one direction that is  $3' \rightarrow 5'$ .
- (4) The DNA dependent RNA polymerase catalyses polymerization in one direction, that is  $5' \rightarrow 3'$ .

149 Spraying sugarcane crop with which of the following plant growth regulators, increases the length of stem, thus, increasing the yield?

- (1) Cytokinin
- (2) Abscisic acid
- (3) Auxin
- (4) Gibberellin

150 In an ecosystem if the Net Primary Productivity (NPP) of first trophic level is

$100x \text{ (kcal m}^{-2} \text{ yr}^{-1})$ , what would be the GPP (Gross Primary Productivity) of the third trophic level of the same ecosystem?

- (1)  $10x \text{ (kcal m}^{-2} \text{ yr}^{-1})$
- (2)  $\frac{100x}{3x} \text{ (kcal m}^{-2} \text{ yr}^{-1})$
- (3)  $\frac{x}{10} \text{ (kcal m}^{-2} \text{ yr}^{-1})$
- (4)  $x \text{ (kcal m}^{-2} \text{ yr}^{-1})$

151 Match List I with List II :

List I	List II
A. Down's syndrome	I. 11 <sup>th</sup> chromosome
B. $\alpha$ -Thalassemia	II. 'X' chromosome
C. $\beta$ -Thalassemia	III. 21 <sup>st</sup> chromosome
D. Klinefelter's syndrome	IV. 16 <sup>th</sup> chromosome

Choose the correct answer from the options given below :

- (1) A-III, B-IV, C-I, D-II
- (2) A-IV, B-I, C-II, D-III
- (3) A-I, B-II, C-III, D-IV
- (4) A-II, B-III, C-IV, D-I

152 Match List I with List II :

List I (Sub Phases of Prophase I)	List II (Specific characters)
A. Diakinesis	I. Synaptonemal complex formation
B. Pachytene	II. Completion of terminalisation of chiasmata
C. Zygotene	III. Chromosomes look like thin threads
D. Leptotene	IV. Appearance of recombination nodules

Choose the correct answer from the options given below :

- (1) A-II, B-IV, C-I, D-III
- (2) A-IV, B-III, C-II, D-I
- (3) A-IV, B-II, C-III, D-I
- (4) A-I, B-II, C-IV, D-III

153 Which of the following factors are favourable for the formation of oxyhaemoglobin in alveoli?

- (1) Low  $p\text{CO}_2$  and High  $\text{H}^+$  concentration
- (2) Low  $p\text{CO}_2$  and High temperature
- (3) High  $p\text{O}_2$  and High  $p\text{CO}_2$
- (4) High  $p\text{O}_2$  and Lesser  $\text{H}^+$  concentration

**154** Match List I with List II :

List I	List II
A. Typhoid	I. Fungus
B. Leishmaniasis	II. Nematode
C. Ringworm	III. Protozoa
D. Filariasis	IV. Bacteria

Choose the correct answer from the options given below :

- (1) A-III, B-I, C-IV, D-II  
(2) A-II, B-IV, C-III, D-I  
(3) A-I, B-III, C-II, D-IV

(4) A-IV, B-III, C-I, D-II •

**155** Match List I with List II :

List I	List II
A. Expiratory capacity	I. Expiratory reserve volume + Tidal volume + Inspiratory reserve volume
B. Functional residual capacity	II. Tidal volume + Expiratory reserve volume
C. Vital capacity	III. Tidal volume + Inspiratory reserve volume
D. Inspiratory capacity	IV. Expiratory reserve volume + Residual volume

Choose the correct answer from the options given below :

- (1) A-II, B-I, C-IV, D-III  
(2) A-I, B-III, C-II, D-IV

(3) A-II, B-IV, C-I, D-III •

(4) A-III, B-II, C-IV, D-I

**156** Which of the following are Autoimmune disorders?

- A. Myasthenia gravis  
B. Rheumatoid arthritis  
C. Gout  
D. Muscular dystrophy  
E. Systemic Lupus Erythematosus (SLE)

Choose the most appropriate answer from the options given below :

- (1) B, C & E only  
(2) C, D & E only  
(3) A, B & D only

(4) A, B & E only •

**157** Given below are two statements :

**Statement I :** In the nephron, the descending limb of loop of Henle is impermeable to water and permeable to electrolytes.

**Statement II :** The proximal convoluted tubule is lined by simple columnar brush border epithelium and increases the surface area for reabsorption.

In the light of the above statements, choose the correct answer from the options given below :

- (1) Statement I is true but Statement II is false  
(2) Statement I is false but Statement II is true  
(3) Both Statement I and Statement II are true  
(4) Both Statement I and Statement II are false

**158** Which of the following is not a steroid hormone?

- (1) Progesterone  
(2) Glucagon •  
(3) Cortisol  
(4) Testosterone

**159** Given below are two statements : one is labelled as Assertion A and the other is labelled as Reason R :

**Assertion A :** FSH acts upon ovarian follicles in female and Leydig cells in male.

**Reason R :** Growing ovarian follicles secrete estrogen in female while interstitial cells secrete androgen in male human being.

In the light of the above statements, choose the correct answer from the options given below :

- (1) A is true but R is false  
(2) A is false but R is true  
(3) Both A and R are true and R is the correct explanation of A.  
(4) Both A and R are true but R is NOT the correct explanation of A.

**160** Given below are some stages of human evolution. Arrange them in correct sequence. (Past to Recent)

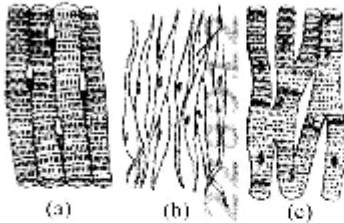
- A. *Homo habilis*  
B. *Homo sapiens*  
C. *Homo neanderthalensis*  
D. *Homo erectus*

Choose the correct sequence of human evolution from the options given below :

- (1) C-B-D-A  
(2) A-D-C-B •  
(3) D-A-C-B  
(4) B-A-D-C



- 161 Three types of muscles are given as a, b and c. Identify the correct matching pair along with their location in human body :



**Name of muscle/location**

- (1) (a) Skeletal - Biceps  
(b) Involuntary - Intestine  
(c) Smooth - Heart.
- (2) (a) Involuntary - Nose tip  
(b) Skeletal - Bone  
(c) Cardiac - Heart.
- (3) (a) Smooth - Toes  
(b) Skeletal - Legs  
(c) Cardiac - Heart.
- (4) (a) Skeletal - Triceps  
(b) Smooth - Stomach  
(c) Cardiac - Heart.

- 162 Match List I with List II :

List I	List II
A. Cocaine	I. Effective sedative in surgery
B. Heroin	II. <i>Cannabis sativa</i>
C. Morphine	III. <i>Erythroxylum</i>
D. Marijuana	IV. <i>Papaver somniferum</i>

Choose the correct answer from the options given below :

- (1) A-II, B-I, C-III, D-IV  
•(2) A-III, B-IV, C-I, D-II  
(3) A-IV, B-III, C-I, D-II  
(4) A-I, B-III, C-II, D-IV

- 163 The "Ti plasmid" of *Agrobacterium tumefaciens* stands for

- (1) Tumor inducing plasmid  
(2) Temperature independent plasmid  
(3) Tumour inhibiting plasmid  
(4) Tumor independent plasmid

- 164 Which one is the correct product of DNA dependent RNA polymerase to the given template?

3'TACATGGCAAATATCCATTCA5'

- (1) 5'AUGUACCGUUUAUAGGGAAGU3'  
(2) 5'ATGTACCGTTTATAGGTAAG13'  
•(3) 5'AUGUACCGUUUAUAGGUAAGU3'  
(4) 5'AUGUAAAGUUUAUAGGUAAGU3'

- 165 Match List I with List II :

List I	List II
A. <i>Pterophyllum</i>	I. Hag fish
B. <i>Myxine</i>	II. Saw fish
C. <i>Pristis</i>	III. Angel fish
D. <i>Exocoetus</i>	IV. Flying fish

Choose the correct answer from the options given below :

- (1) A-IV, B-I, C-II, D-III  
•(2) A-III, B-II, C-I, D-IV  
(3) A-II, B-I, C-III, D-IV  
•(4) A-III, B-I, C-II, D-IV

- 166 Match List I with List II :

List I	List II
A. Fibrous joints	I. Adjacent vertebrae, limited movement
B. Cartilaginous joints	II. Humerus and Pectoral girdle, rotational movement
C. Hinge joints	III. Skull, don't allow any movement
D. Ball and socket joints	IV. Knee, help in locomotion

Choose the correct answer from the options given below :

- (1) A-II, B-III, C-I, D-IV  
•(2) A-III, B-I, C-IV, D-II  
(3) A-IV, B-II, C-III, D-I  
(4) A-I, B-III, C-II, D-IV

167 The flippers of the Penguins and Dolphins are the example of the

- (1) Convergent evolution
- (2) Divergent evolution
- (3) Adaptive radiation
- (4) Natural selection

168 Match List I with List II :

List I	List II
A. $\alpha$ -1 antitrypsin	I. Cotton bollworm
B. Cry IAb	II. ADA deficiency
C. Cry IAc	III. Emphysema
D. Enzyme replacement therapy	IV. Corn borer

Choose the correct answer from the options given below :

- (1) A-III, B-IV, C-I, D-II
- (2) A-II, B-IV, C-I, D-III
- (3) A-II, B-I, C-IV, D-III
- (4) A-III, B-I, C-II, D-IV

169 Match List I with List II :

List I	List II
A. Axoneme	I. Centriole
B. Cartwheel pattern	II. Cilia and flagella
C. Crista	III. Chromosome
D. Satellite	IV. Mitochondria

Choose the correct answer from the options given below :

- (1) A-II, B-IV, C-I, D-III
- (2) A-II, B-I, C-IV, D-III
- (3) A-IV, B-III, C-II, D-I
- (4) A-IV, B-II, C-III, D-I

170 Given below are two statements : one is labelled as Assertion A and the other is labelled as Reason R :

**Assertion A :** Breast-feeding during initial period of infant growth is recommended by doctors for bringing a healthy baby.

**Reason R :** Colostrum contains several antibodies absolutely essential to develop resistance for the new born baby.

In the light of the above statements, choose the most appropriate answer from the options given below :

- (1) A is correct but R is not correct.
- (2) A is not correct but R is correct.
- (3) Both A and R are correct and R is the correct explanation of A.
- (4) Both A and R are correct but R is NOT the correct explanation of A.

171 Which of the following is not a component of Fallopian tube?

- (1) Infundibulum
- (2) Ampulla
- (3) Uterine fundus
- (4) Isthmus

172 Which of the following statements is incorrect?

- (1) Bio-reactors are used to produce small scale bacterial cultures.
- (2) Bio-reactors have an agitator system, an oxygen delivery system and foam control system.
- (3) A bio-reactor provides optimal growth conditions for achieving the desired product.
- (4) Most commonly used bio-reactors are of stirring type.

173 Match List I with List II :

List I	List II
A. Pons	I. Provides additional space for Neurons, regulates posture and balance.
B. Hypothalamus	II. Controls respiration and gastric secretions.
C. Medulla	III. Connects different regions of the brain.
D. Cerebellum	IV. Neuro secretory cells

Choose the correct answer from the options given below :

- (1) A-I, B-III, C-II, D-IV  
(2) A-II, B-I, C-III, D-IV  
(3) A-II, B-III, C-I, D-IV  
(4) A-III, B-IV, C-II, D-I

174 Match List I with List II :

List I	List II
A. Lipase	I. Peptide bond
B. Nuclease	II. Ester bond
C. Protease	III. Glycosidic bond
D. Amylase	IV. Phosphodiester bond

Choose the correct answer from the options given below :

- (1) A-II, B-IV, C-I, D-III  
(2) A-IV, B-I, C-III, D-II  
(3) A-IV, B-II, C-III, D-I  
(4) A-III, B-II, C-I, D-IV

175 Which of the following is not a natural/traditional contraceptive method?

- (1) Lactational amenorrhea  
(2) Vaults  
(3) Coitus interruptus  
(4) Periodic abstinence

176 Following are the stages of pathway for conduction of an action potential through the heart:

- A. AV bundle  
B. Purkinje fibres  
C. AV node  
D. Bundle branches  
E. SA node

Choose the correct sequence of pathway from the options given below :

- (1) B-D-E-C-A (2) E-A-D-B-C  
(3) E-C-A-D-B (4) A-E-C-B-D

177 Match List I with List II :

List I	List II
A. Pleurobrachia	I. Mollusca
B. Radula	II. Ctenophora
C. Stomochord	III. Osteichthyes
D. Air bladder	IV. Hemichordata

Choose the correct answer from the options given below :

- (1) A-II, B-IV, C-I, D-III  
(2) A-IV, B-III, C-II, D-I  
(3) A-IV, B-II, C-III, D-I  
(4) A-II, B-I, C-IV, D-III

178 Match List I with List II :

List I	List II
A. Common cold	I. <i>Plasmodium</i>
B. Haemozoin	II. Typhoid
C. Widal test	III. Rhinoviruses
D. Allergy	IV. Dust mites

Choose the correct answer from the options given below :

- (1) A-III, B-I, C-II, D-IV  
(2) A-IV, B-II, C-III, D-I  
(3) A-II, B-IV, C-III, D-I  
(4) A-I, B-III, C-II, D-IV



179 Consider the following statements :

- A. Annelids are true coelomates
- B. Poriferans are pseudocoelomates
- C. Aschelminthes are acoelomates
- D. Platyhelminthes are pseudocoelomates

Choose the correct answer from the options given below :

- (1) C only
- (2) D only
- (3) B only
- (4) A only

180 In both sexes of cockroach, a pair of jointed filamentous structures called anal cerci are present on :

- (1) 8<sup>th</sup> and 9<sup>th</sup> segment
- (2) 11<sup>th</sup> segment
- (3) 5<sup>th</sup> segment
- (4) 10<sup>th</sup> segment

181 Given below are two statements :

**Statement I :** The presence or absence of hymen is not a reliable indicator of virginity.

**Statement II :** The hymen is torn during the first coitus only.

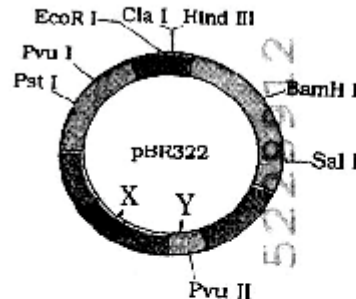
In the light of the above statements, choose the correct answer from the options given below :

- (1) Statement I is true but Statement II is false
- (2) Statement I is false but Statement II is true
- (3) Both Statement I and Statement II are true
- (4) Both Statement I and Statement II are false

182 Which one of the following factors will not affect the Hardy-Weinberg equilibrium?

- (1) Gene migration
- (2) Constant gene pool
- (3) Genetic recombination
- (4) Genetic drift

183 The following diagram showing restriction sites in *E. coli* cloning vector pBR322. Find the role of 'X' and 'Y' genes :



- (1) The gene 'X' is for protein involved in replication of Plasmid and 'Y' for resistance to antibiotics.
- (2) Gene 'X' is responsible for recognition sites and 'Y' is responsible for antibiotic resistance.
- (3) The gene 'X' is responsible for resistance to antibiotics and 'Y' for protein involved in the replication of Plasmid.
- (4) The gene 'X' is responsible for controlling the copy number of the linked DNA and 'Y' for protein involved in the replication of Plasmid.

184 Match List I with List II :

List I	List II
A. Non-medicated IUD	I. Multiload 375
B. Copper releasing IUD	II. Progestogens
C. Hormone releasing IUD	III. Lippes loop
D. Implants	IV. LNG-20

Choose the correct answer from the options given below :

- (1) A-IV, B-I, C-II, D-III
- (2) A-III, B-I, C-IV, D-II
- (3) A-III, B-I, C-II, D-IV
- (4) A-I, B-III, C-IV, D-II

185 Following are the stages of cell division :

- A. Gap 2 phase
- B. Cytokinesis
- C. Synthesis phase
- D. Karyokinesis
- E. Gap 1 phase

Choose the correct sequence of stages from the options given below :

- (1) B-D-E-A-C
- (2) E-C-A-D-B
- (3) C-E-D-A-B
- (4) E-B-D-A-C

**186** Choose the correct statement given below regarding juxta medullary nephron.

- (1) Loop of Henle of juxta medullary nephron runs deep into medulla.
- (2) Juxta medullary nephrons outnumber the cortical nephrons.
- (3) Juxta medullary nephrons are located in the columns of Bertini.
- (4) Renal corpuscle of juxta medullary nephron lies in the outer portion of the renal medulla.

**187** The following are the statements about non-chordates :

- A. Pharynx is perforated by gill slits.
- B. Notochord is absent.
- C. Central nervous system is dorsal.
- D. Heart is dorsal if present.
- E. Post anal tail is absent.

Choose the most appropriate answer from the options given below :

- (1) B, D & E only
- (2) B, C & D only
- (3) A & C only
- (4) A, B & D only

**188** Given below are two statements :

**Statement I :** Mitochondria and chloroplasts are both double membrane bound organelles.

**Statement II :** Inner membrane of mitochondria is relatively less permeable, as compared to chloroplast.

In the light of the above statements, choose the most appropriate answer from the options given below :

- (1) Statement I is correct but Statement II is incorrect.
- (2) Statement I is incorrect but Statement II is correct.
- (3) Both Statement I and Statement II are correct.
- (4) Both Statement I and Statement II are incorrect.

**189** Regarding catalytic cycle of an enzyme action, select the correct sequential steps :

- A. Substrate enzyme complex formation.
- B. Free enzyme ready to bind with another substrate.
- C. Release of products.
- D. Chemical bonds of the substrate broken.
- E. Substrate binding to active site.

Choose the correct answer from the options given below :

- (1) B, A, C, D, E
- (2) E, D, C, B, A
- (3) E, A, D, C, B
- (4) A, E, B, D, C

**190** Match List I with List II :

List I	List II
A. P wave	I. Heart muscles are electrically silent.
B. QRS complex	II. Depolarisation of ventricles.
C. T wave	III. Depolarisation of atria.
D. T-P gap	IV. Repolarisation of ventricles.

Choose the correct answer from the options given below :

- (1) A-II, B-III, C-I, D-IV
- (2) A-IV, B-II, C-I, D-III
- (3) A-I, B-III, C-IV, D-II
- (4) A-III, B-II, C-IV, D-I

**191** Given below are two statements :

**Statement I :** Bone marrow is the main lymphoid organ where all blood cells including lymphocytes are produced.

**Statement II :** Both bone marrow and thymus provide micro environments for the development and maturation of T-lymphocytes.

In the light of the above statements, choose the most appropriate answer from the options given below :

- (1) Statement I is correct but Statement II is incorrect.
- (2) Statement I is incorrect but Statement II is correct.
- (3) Both Statement I and Statement II are correct.
- (4) Both Statement I and Statement II are incorrect.

192 Match List I with List II :

List I	List II
A. Unicellular glandular epithelium	I. Salivary glands
B. Compound epithelium	II. Pancreas
C. Multicellular glandular epithelium	III. Goblet cells of alimentary canal
D. Endocrine glandular epithelium	IV. Moist surface of buccal cavity

Choose the correct answer from the options given below :

- (1) A-III, B-IV, C-I, D-II  
(2) A-II, B-I, C-IV, D-III  
(3) A-II, B-I, C-III, D-IV  
(4) A-IV, B-III, C-I, D-II

193 Given below are two statements :

**Statement I :** The cerebral hemispheres are connected by nerve tract known as corpus callosum.

**Statement II :** The brain stem consists of the medulla oblongata, pons and cerebrum.

In the light of the above statements, choose the most appropriate answer from the options given below :

- (1) Statement I is correct but Statement II is incorrect.  
(2) Statement I is incorrect but Statement II is correct.  
(3) Both Statement I and Statement II are correct.  
(4) Both Statement I and Statement II are incorrect.

194 Match List I with List II :

List I	List II
A. RNA polymerase III	I. snRNPs
B. Termination of transcription	II. Promotor
C. Splicing of Exons	III. Rho factor
D. TATA box	IV. SnRNAs, tRNA

Choose the correct answer from the options given below :

- (1) A-III, B-IV, C-I, D-II  
(2) A-IV, B-III, C-I, D-II  
(3) A-II, B-IV, C-I, D-III  
(4) A-III, B-II, C-IV, D-I

195 Match List I with List II :

List I	List II
A. Mesozoic Era	I. Lower invertebrates
B. Proterozoic Era	II. Fish & Amphibia
C. Cenozoic Era	III. Birds & Reptiles
D. Paleozoic Era	IV. Mammals

Choose the correct answer from the options given below :

- (1) A-I, B-II, C-IV, D-III  
(2) A-III, B-I, C-IV, D-II  
(3) A-II, B-I, C-III, D-IV  
(4) A-III, B-I, C-II, D-IV

196 Given below are two statements :

**Statement I :** Gause's competitive exclusion principle states that two closely related species competing for different resources cannot exist indefinitely.

**Statement II :** According to Gause's principle, during competition, the inferior will be eliminated. This may be true if resources are limiting.

In the light of the above statements, choose the correct answer from the options given below :

- (1) Statement I is true but Statement II is false.  
(2) Statement I is false but Statement II is true.  
(3) Both Statement I and Statement II are true.  
(4) Both Statement I and Statement II are false.







# NEET-UG 2023

## Heartiest Congratulations to all students on getting Admission in Medical Colleges



**Manish Singh**

IMS, BHU



**Lavish Chaudhary**

Rani Laxmi Bai Med. Coll., Jhansi



**Vani Thakur**

Moti Lal Nehru Med. Coll., Prayagraj



**Ayushi Tiwari**

G.M.C., Dehradun



**Sakshi Lasiyal**

G.M.C., Dehradun



**Akshat Panwar**

G.M.C., Dehradun



**Ananya Tyagi**

G.M.C., Dehradun



**Ishita Rawat**

G.M.C., Dehradun



**Shubh Shukla**

G.M.C., Haldwani



**Shivani Ringola**

G.M.C., Dehradun



**Ambika Pant**

G.M.C., Dehradun



**Nishita Thapliyal**

G.M.C., Dehradun



**Kanupriya Sati**

G.M.C., Srinagar



**Tanishq Singh**

G.M.C., Dehradun



**Shivangi**

G.M.C., Srinagar



**Bhuvi Singh**

G.M.C., Haldwani



**Charul Sharma**

G.M.C., Almora



**Mohit Singh**

G.M.C., Srinagar



**Priyanshu Raj Verma**

G.M.C., Haldwani



**Shivani Negi**

G.M.C., Dehradun



**Rahul Kumar**

G.M.C., Dehradun



**Shivanshi Rawat**

G.M.C., Almora



**Manprit Kaur**

G.M.C., Almora



**Jasneet Kaur**

G.M.C., Almora



**Roshni**

G.M.C., Srinagar



**Sandhya**

G.M.C., Almora



**Raman Rawat**

G.M.C., Dehradun



**Bhupesh S. Thalal**

G.M.C., Almora



**Priyanka Negi**

G.M.C., Almora



**Abhishek Nautiyal**

G.M.C., Almora



**Trapti Yadav**

Varan Arjun, Med. Coll., Sahpapur, UP



**Mukesh Singh**

G.M.C., Kerala